

(Part-I)

2. Write short answers to any Six (6) questions: 12

(i) Find $|C|$: $C = \begin{bmatrix} 3 & 2 \\ 3 & 2 \end{bmatrix}$

Ans $C = \begin{bmatrix} 3 & 2 \\ 3 & 2 \end{bmatrix}$

$|C| = \begin{vmatrix} 3 & 2 \\ 3 & 2 \end{vmatrix}$

$|C| = (3)(2) - 3(2)$

$|C| = 6 - 6$

$|C| = 0$

(ii) Find the product: $\begin{bmatrix} 1 & 2 \\ -3 & 0 \\ 6 & -1 \end{bmatrix} \begin{bmatrix} 4 & 5 \\ 0 & -4 \end{bmatrix}$

Ans $\begin{bmatrix} 1 & 2 \\ -3 & 0 \\ 6 & -1 \end{bmatrix} \begin{bmatrix} 4 & 5 \\ 0 & -4 \end{bmatrix}$

1^{st} matrix has (3×2) order, while 2^{nd} matrix has (2×2) order. As number of columns of 1^{st} matrix is equal to number of rows of 2^{nd} matrix, thus product of above matrices will exist. So,


$$\begin{bmatrix} 1 & 2 \\ -3 & 0 \\ 6 & -1 \end{bmatrix} \begin{bmatrix} 4 & 5 \\ 0 & -4 \end{bmatrix} = \begin{bmatrix} 1(4) + 2(0) & 1(5) + 2(-4) \\ -3(4) + 0(0) & -3(5) + 0(-4) \\ 6(4) + (-1)(0) & 6(5) + (-1)(-4) \end{bmatrix}$$

$$= \begin{bmatrix} 4 + 0 & 5 - 8 \\ -12 + 0 & -15 + 0 \\ 24 + 0 & 30 + 4 \end{bmatrix}$$

$$= \begin{bmatrix} 4 & -3 \\ -12 & -15 \\ 24 & 34 \end{bmatrix}$$

(iii) Represent the number $\frac{15}{7}$ on the number line.

Ans $\frac{15}{7} = 2\frac{1}{7}$: It lies between 2 and 3.



Divide the distance between 2 and 3 into seven equal parts. The point P represents the number $\frac{15}{7} = 2\frac{1}{7}$.

(iv) Write the real and imaginary part of the number: $2 + 0i$:

Ans Real part = 2
Imaginary part = 0

(v) Write into sum or difference: $\log \frac{(22)^{1/3}}{5^3}$

Ans $\log \frac{(22)^{1/3}}{5^3}$
 $= \log (22)^{1/3} - \log (5)^3$
 $= \frac{1}{3} \log (22) - 3 \log (5)$

(vi) Write in the form of a single logarithm:

$$\log 25 - 2 \log 3$$

Ans $\log 25 - 2 \log 3$
 $= \log 25 - \log 3^2$
 $= \frac{\log 25}{\log 3^2} = \log \frac{25}{3^2}$

(vii) Reduce the algebraic fraction to their lowest form:

$$\frac{lx + mx - ly - my}{3x^2 - 3y^2}$$

Ans $\frac{lx + mx - ly - my}{3x^2 - 3y^2} = \frac{x(l + m) - y(l + m)}{3(x^2 - y^2)}$

$$= \frac{(l+m)(x-y)}{3(x+y)(x-y)} \quad (\text{Factorizing})$$

$$= \frac{l+m}{3(x+y)} \quad (\text{Canceling common factors})$$

Which is in the lowest form.

(viii) Evaluate $\frac{x^2y - 2z}{xz}$ for $x = 3, y = -1, z = -2$

Ans By putting the values $x = 3, y = -1, z = -2$ in the expression $\frac{x^2y - 2z}{xz}$:

$$= \frac{(3)^2(-1) - (2)(-2)}{(3)(-2)}$$

$$= \frac{9(-1) + 4}{-6}$$

$$= \frac{-9 + 4}{-6}$$

$$= \frac{-5}{-6}$$

$$= \frac{5}{6}$$

(ix) Define remainder theorem.

Ans If a polynomial $p(x)$ is divided by a linear divisor $(x-a)$ then the remainder is $p(a)$.

3. Write short answers to any Six (6) questions:

(i) Find square root of the following $4x^2 - 12x + 9$ by factorization.

Ans Factorization of the expression $4x^2 - 12x + 9$ is of the type: $(a)^2 - 2(a)(b) + (b)^2 = (a - b)^2$

$$\text{So, } 4x^2 - 12x + 9$$

$$= (2x)^2 - 2(2x)(3) + (3)^2$$

$$= (2x - 3)^2$$

Taking square root

$$= \pm(2x - 3)$$

(ii) Solve it: $\sqrt[3]{2x - 4} - 2 = 0$

Ans $\sqrt[3]{2x - 4} = 2$

$$(2x - 4)^{1/3} = 2$$

By taking cube both sides,

$$[(2x - 4)^{1/3}]^3 = (2)^3$$

$$2x - 4 = 8$$

$$2x = 8 + 4$$

$$2x = 12$$

$$x = \frac{12}{2}$$

$$\boxed{x = 6}$$

(iii) Find the solution set of the equation: $\left| \frac{x+5}{2-x} \right| = 6$

Ans

$$\left| \frac{x+5}{2-x} \right| = 6$$

$$\pm \left(\frac{x+5}{2-x} \right) = 6$$

$$\frac{x+5}{2-x} = 6$$

$$x+5 = 6(2-x)$$

$$x+5 = 12 - 6x$$

$$x+6x = 12 - 5$$

$$7x = 7$$

$$x = \frac{7}{7}$$

$$\boxed{x = 1}$$

$$-\left(\frac{x+5}{2-x} \right) = 6$$

$$-(x+5) = 6(2-x)$$

$$-x - 5 = 12 - 6x$$

$$-x + 6x = 12 + 5$$

$$5x = 17$$

$$\boxed{x = \frac{17}{5}}$$

So, solution set = $\left\{ 1, \frac{17}{5} \right\}$.

(iv) Define Cartesian Plane.

Ans

The Cartesian plane establishes (one-to-one) correspondence between the set of ordered pairs $R \times R = \{(x, y) \mid x, y \in R\}$ and the points of the Cartesian plane.

(v) Draw in which quadrant points lie P(-5, -2), R(2, 2).

Ans

Ordered Pair

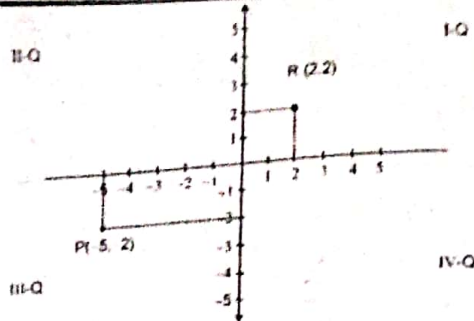
P(-5, -2)

R(2, 2)

Quadrant

III - Q

I - Q



(vi) Define equilateral triangle.

Ans If the lengths of all the three sides of a triangle are same, then the triangle is called an equilateral triangle.

(vii) Find the distance between points

$$A(-4, \sqrt{2}), B(-4, -3)$$

Ans Formula for distance between two points:

$$d = \sqrt{|x_2 - x_1|^2 + |y_2 - y_1|^2}$$

Here, from question:

$$x_1 = -4, \quad y_1 = \sqrt{2}$$

$$x_2 = -4, \quad y_2 = -3$$

By putting, we get:

$$d = \sqrt{[(-4) - (-4)]^2 + [(-3) - \sqrt{2}]^2}$$

$$d = \sqrt{(-4 + 4)^2 + (-3 - \sqrt{2})^2}$$

$$d = \sqrt{0 + [(-1)(3 + \sqrt{2})]^2}$$

$$d = \sqrt{(-1)^2(3 + \sqrt{2})^2}$$

$$d = \sqrt{(3 + \sqrt{2})^2}$$

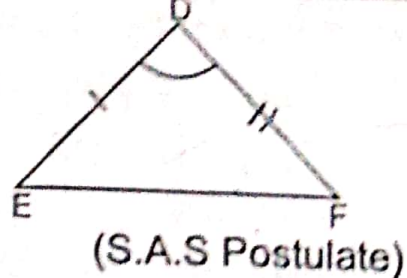
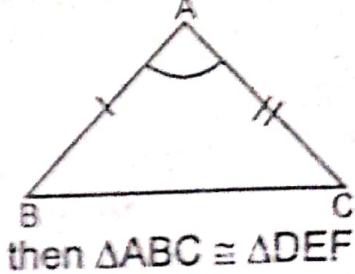
$$d = 3 + \sqrt{2}$$

(viii) What do you mean by SAS \cong SAS?

Ans In any correspondence of two triangles, if two sides and their included angle of one triangle are congruent to the corresponding two sides and their included angle of the other, then the triangles are congruent.

In $\triangle ABC \leftrightarrow \triangle DEF$, shown in the following figures.

$$\text{if } \begin{cases} \overline{AB} \cong \overline{DE} \\ \angle A \cong \angle D \\ \overline{AC} \cong \overline{DF} \end{cases}$$



(ix) Define parallelogram.

Ans A figure formed by four non-collinear points in the plane is called parallelogram. Its characteristics are as under:

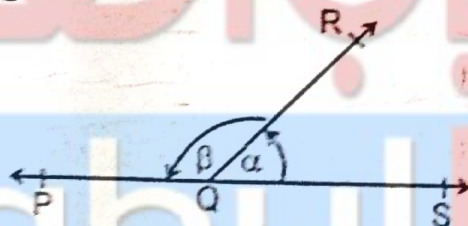
1. Its equal opposite sides are of equal measure.
2. Its opposite sides are parallel.
3. Measure of none of the angle is 90° .

4. Write short answers to any Six (6) questions: 12

(i) Define supplementary angles. Give an example.

Ans Supplementary angles are two angles whose sum is 180° . If the sum of two angles is 180° , then each angle is called the supplement of the other.

For example, in the following figure, $\angle\alpha$ and $\angle\beta$ are supplementary angles.



(ii) Can a triangle of lengths 2 cm, 4 cm and 7 cm be formed? Give reason.

Ans 2 cm, 4 cm and 7 cm cannot be the sides of a triangles, because $2 + 4 < 7$. The condition for forming a triangle is the sum of the lengths of any two sides of a triangle is greater than the length of the third side.

(iii) Define proportion.

Ans Equality of two ratios is defined as the proportion. If $a : b = c : d$, then a, b, c and d are said to be a proportion.

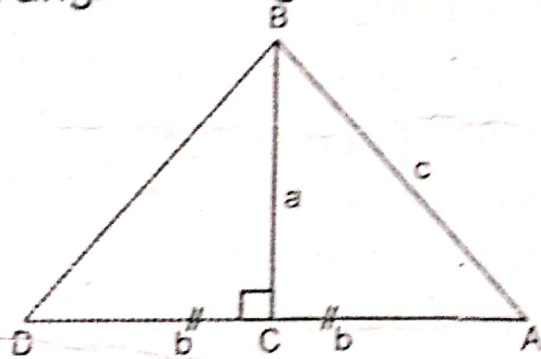
(iv) Define similar triangles.

Ans Two (or more) triangles are called similar, if they are equiangular and measure of their corresponding sides are proportional. The symbol for similar triangle is (\sim).

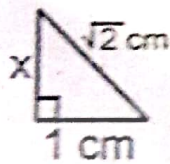
(v) What is meant by converse of Pythagoras theorem?

Ans Converse of Pythagoras theorem is:

If the square of one side of a triangle is equal to sum of the squares of the other two sides, then triangle is a right angled triangle.



(vi) Find the value of unknown x :



Ans In right angled $\triangle ABC$ is:

$$(m AC)^2 = (m AB)^2 + (m BC)^2 \text{ (Pythagoras Theorem)}$$

By putting values:

$$(\sqrt{2})^2 = (x)^2 + (1)^2$$

$$2 = x^2 + 1$$

$$x^2 = 2 - 1$$

$$x^2 = 1$$

By taking square root:

$$\sqrt{x^2} = \sqrt{1}$$

$$x = 1 \text{ cm}$$

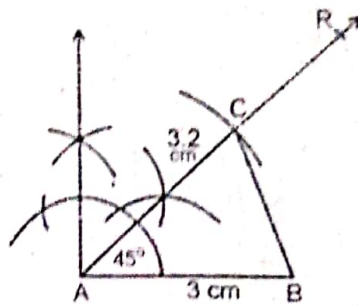
(vii) Define triangular region.

Ans A triangular region is the union of a triangle and its interior, i.e., the three line segments forming the triangle and its interior.

(viii) Define circumcentre of a triangle.

Ans The point of concurrency of the perpendicular bisectors of the sides of a triangle is called its circumcentre.

(ix) Construct $\triangle ABC$, in which : $m \overline{AB} = 3 \text{ cm}$, $m \overline{AC} = 3 \text{ cm}$, $m \angle A = 45^\circ$



Steps of Construction:

- ii) Take a line segment $\overline{AB} = 3 \text{ cm}$.
- i) Make an angle of 45° at A.
- ii) Take A as centre and cut off $\overline{AC} = 3.2 \text{ cm}$ on \overrightarrow{AR} .
- v) Join C to B.
- (v) ABC is the required triangle.

(Part-II)

NOTE: Attempt Three (3) questions in all. But question No. 9 is Compulsory.

Q.5.(a) Solve with help of Cramer's rule: (4)

$$4x + 2y = 8$$

$$3x - y = -1$$

Ans Write the equations in matrix form

$$\begin{bmatrix} 4 & 2 \\ 3 & -1 \end{bmatrix} \begin{bmatrix} x \\ y \end{bmatrix} = \begin{bmatrix} 8 \\ -1 \end{bmatrix}$$

Let, $A X = B$

Where,

$$A = \begin{bmatrix} 4 & 2 \\ 3 & -1 \end{bmatrix}, X = \begin{bmatrix} x \\ y \end{bmatrix}, B = \begin{bmatrix} 8 \\ -1 \end{bmatrix}$$

$$|A| = \begin{vmatrix} 4 & 2 \\ 3 & -1 \end{vmatrix}$$

$$|A| = (4)(-1) - (2)(3)$$

$$|A| = -4 - 6$$

$$\boxed{|A| = -10}$$

$$|A| = \begin{vmatrix} 8 & 2 \\ -1 & -1 \end{vmatrix}$$

$$|A_x| = (8)(-1) - (-1)(2)$$

$$|A_x| = -8 + 2$$

$$\boxed{|A_x| = -6}$$

$$|A_y| = \begin{vmatrix} 4 & 8 \\ 3 & -1 \end{vmatrix}$$

$$|A_y| = (4)(-1) - (3)(8)$$

$$|A_y| = -4 - 24$$

$$\boxed{|A_y| = -28}$$

$$\text{So, } x = \frac{|A_x|}{|A|} = \frac{-6}{-10} = \frac{3}{5}$$

$$y = \frac{|A_y|}{|A|} = \frac{-28}{-10} = \frac{14}{5}$$

$$\text{Solution Set} = \left[\frac{3}{5}, \frac{14}{5} \right]$$

(b) Solve the equation for real x and y

$$(3 + 4i)^2 - 2(x - yi) = x + yi$$

Ans

$$(3 + 4i)^2 - 2(x - yi) = x + yi$$

$$9 + 24i + 16i^2 - 2x - 2yi = x + yi$$

$$9 + 24i + 16(-1) - 2x + 2yi = x + yi$$

$$9 + 24i - 16 - 2x - x + 2yi - yi = 0$$

$$9 + 24i - 16 - 3x + yi = 0$$

$$-3x + yi = 16 - 9 - 24i$$

$$-3x + yi = 7 - 24i$$

By comparing w.r.t $a + bi$ form:

$$-3x = 7 \quad \dots (i)$$

$$y = -24 \quad \dots (ii)$$

and
from (i)

$$-3x = 7$$

$$x = \frac{-7}{3}$$

$$\boxed{x = \frac{-7}{3}}, \boxed{y = -24}$$

Q.6.(a) Use log tables to find the value of:

(4)

$$\frac{(438)^3 \sqrt{0.056}}{(388)^4}$$

Ans Let $x = \frac{(438)^3 \sqrt{0.056}}{(388)^4}$
 $x = \frac{(438)^3 (0.056)^{1/2}}{(388)^4}$

By taking log, both sides:

$$\log x = \log \left[\frac{(438)^3 (0.056)^{1/2}}{(388)^4} \right]$$

$$\log x = 3 \log 438 + \frac{1}{2} \log 0.056 - 4 \log 388$$

$$\log x = 3(2.6415) + \frac{1}{2} (\bar{2}.7482) - 4(2.5888)$$

$$\log x = 7.9245 + \bar{1}.3741 - 10.3552$$

$$\log x = 7.9245 - 1 + 0.3741 - 10.3552$$

$$\log x = -3.0566$$

$$\log x = -3.0566 - 1 + 1$$

$$\log x = \bar{4}.9434$$

Taking antilog both sides,

$$x = \text{Antilog}(\bar{4}.9434)$$

$$x = 0.0008778$$

(b) Simplify: $\frac{\sqrt{a^2+2} + \sqrt{a^2-2}}{\sqrt{a^2+2} - \sqrt{a^2-2}}$

(4)

Ans With Rationalization:

$$= \frac{\sqrt{a^2+2} + \sqrt{a^2-2}}{\sqrt{a^2+2} - \sqrt{a^2-2}} \times \frac{\sqrt{a^2+2} + \sqrt{a^2-2}}{\sqrt{a^2+2} + \sqrt{a^2-2}}$$

$$= \frac{(\sqrt{a^2+2} + \sqrt{a^2-2})^2}{(\sqrt{a^2+2})^2 - (\sqrt{a^2-2})^2}$$

$$= \frac{(\sqrt{a^2+2})^2 + (\sqrt{a^2-2})^2 + 2(\sqrt{a^2+2})(\sqrt{a^2-2})}{(a^2+2) - (a^2-2)}$$

$$\begin{aligned}
&= \frac{(a^2 + 2) + (a^2 - 2) + 2\sqrt{(a^2 + 2)(a^2 - 2)}}{a^2 + 2 - a^2 + 2} \\
&= \frac{a^2 + 2 + a^2 - 2 + 2\sqrt{(a^2)^2 - (2)^2}}{4} \\
&= \frac{2a^2 + 2\sqrt{a^4 - 4}}{4} \\
&= \frac{2(a^2 + \sqrt{a^4 - 4})}{4} \\
&= \frac{a^2 + \sqrt{a^4 - 4}}{2}
\end{aligned}$$

2.7.(a) Factorize: $2x^3 + x^2 - 2x - 1$

Ans We have; $P(x) = 2x^3 + x^2 - 2x - 1$

The possible factors of the constant term

$$P = -1 \text{ are } \pm 1, \pm \frac{1}{2}.$$

From factors of the constant

$$\text{Let, } x = -1$$

$$\begin{aligned}
P(-1) &= 2(-1)^3 + (-1)^2 - 2(-1) - 1 \\
&= 2(-1) + 1 + 2 - 1 \\
&= -2 + 3 - 1 \\
&= 0
\end{aligned}$$

Hence, $x = -1$ is a zero of $P(x)$;

$$\text{As, } x - a = 0$$

$$x - (-1) = 0$$

$$x + 1 = 0$$

So, $x + 1$ is the 1st factor of $P(x)$.

Similarly,

$$\text{Let } x = 1$$

$$\begin{aligned}
P(1) &= 2(1)^3 + (1)^2 - 2(1) - 1 \\
&= 2(1) + 1 - 2 - 1 \\
&= 2 + 1 - 2 - 1 \\
&= 0
\end{aligned}$$

Hence, $x = 1$ is a zero of $P(x)$;

$$\text{As, } x - a = 0$$

$$x - 1 = 0$$

So, $x - 1$ is the 2nd factor of $P(x)$.

Again;

$$\text{Let } x = \frac{-1}{2}$$

$$\begin{aligned} P\left(\frac{-1}{2}\right) &= 2\left(\frac{-1}{2}\right)^3 + \left(\frac{-1}{2}\right)^2 - 2\left(\frac{-1}{2}\right) - 1 \\ &= 2\left(\frac{-1}{8}\right) + \left(\frac{1}{4}\right) + 1 - 1 \\ &= \frac{-1}{4} + \frac{1}{4} + 0 \\ &= 0 \end{aligned}$$

Hence, $x = \frac{-1}{2}$ is a zero of $P(x)$

$$\text{As, } x - a = 0$$

$$x - \left(\frac{-1}{2}\right) = 0$$

$$x + \frac{1}{2} = 0$$

$$(2)(x) + (2)\left(\frac{1}{2}\right) = (0)(2)$$

$$2x + 1 = 0$$

So, $2x + 1$ is the last factor of $P(x)$. As from the expression, there exist maximum three factors, i.e.,

The factors of $P(x)$ are $= (x - 1)(x + 1)(2x + 1)$

(b) Find the H.C.F of the following polynomials: (4)

$$x^2 - 4, x^2 + 4x + 4, 2x^2 + x - 6$$

Ans By factorization:

$$x^2 - 4 = (x + 2)(x - 2)$$

$$x^2 + 4x + 4 = (x + 2)^2 = (x + 2)(x + 2)$$

$$2x^2 + x - 6 = 2x^2 + 4x - 3x - 6$$

$$= 2x(x + 2) - 3(x + 2)$$

$$= (x + 2)(2x - 3)$$

Hence, H.C.F = $x + 2$

Q.8.(a) Find the solution set of the equation:

$$|8x - 3| = |4x + 5|$$

$$8x - 3 = \pm(4x + 5)$$

Ans Since two numbers having the same absolute value are either equal or differ in sign, therefore, the given equation is equivalent to

$$8x - 3 = 4x + 5$$

$$8x - 4x = 5 + 3$$

$$4x = 8$$

$$\boxed{x = 2}$$

$$8x - 3 = -(4x + 5)$$

$$8x - 3 = -4x - 5$$

$$8x + 4x = -5 + 3$$

$$12x = -2$$

$$\boxed{x = \frac{-1}{6}}$$

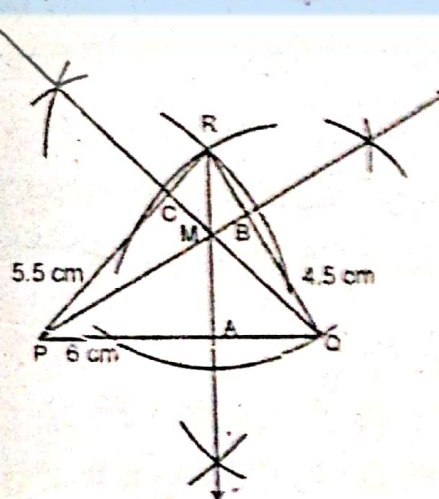
On checking, we find that $x = 2$, $x = \frac{-1}{6}$ both satisfy the original equation.

Hence the solution set = $\left\{\frac{-1}{6}, 2\right\}$.

(b) Construct $\triangle PQR$, draw its altitudes and show that they are concurrent:

$m\overline{PQ} = 6$ cm, $m\overline{QR} = 4.5$ cm and $m\overline{PR} = 5.5$ cm

Ans



Steps of Construction:

- (i) Take a line segment $\overline{PQ} = 6$ cm.
- (ii) Take P as centre and draw an arc of 5.5 radius.
- (iii) Take Q as centre and draw an arc of 4.5 radius.

v) Join R to P and Q.

∴ PQR is the required triangle.

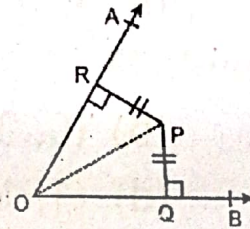
v) Drop \overline{RA} , \overline{PB} and \overline{QC} perpendiculars to \overline{PQ} , \overline{QR} and \overline{RP} , respectively.

\overline{RA} , \overline{PB} and \overline{QC} are concurrent at M.

Q.9. Prove that any point inside an angle, equidistant from its arms, is on the bisector of it. (8)

Ans Given:

Any point P lies inside $\angle AOB$ such that $\overline{PQ} \cong \overline{PR}$, where $\overline{PQ} \perp \overline{OB}$ and $\overline{PR} \perp \overline{OA}$.



To Prove:

Point P is on the bisector of $\angle AOB$.

Construction:

Join P to O.

Proof:

	Statements	Reasons
In	$\triangle POQ \leftrightarrow \triangle POR$	
	$\angle PQO \cong \angle PRO$	given (right angles)
	$\overline{PO} \cong \overline{PO}$	common
	$\overline{PQ} \cong \overline{PR}$	given
∴	$\triangle POQ \cong \triangle POR$	H.S \cong H.S
Hence,	$\angle POQ \cong \angle POR$	(corresponding angles of congruent triangles)
i.e.,	P is on the bisector of $\angle AOB$.	

OR

Prove that triangles on the same base and of the same (i.e., equal) altitudes are equal in area.

Ans For Answer see Paper 2014 (Group-I), Q.9.(OR).